

Name: _____

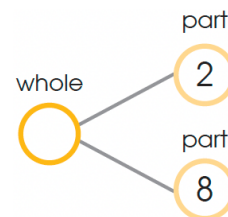
Date Started: _____ Date Completed: _____ Score: _____

Learning Activity Sheet Number Bonds

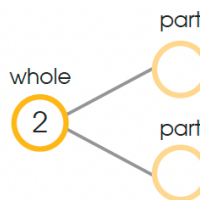
A. Complete the number bond. Then fill in the blank.



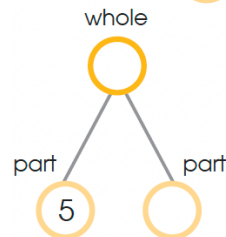
2 and 8 make _____.



_____ and _____ make 2.



5 and _____ make _____.

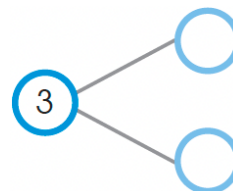


4. Antonio has 3 toys.



He has _____ toy robots.

He has _____ teddy bear.

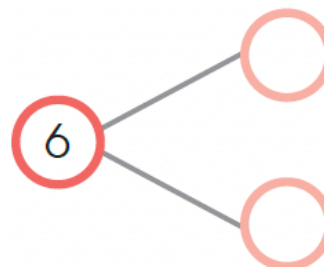


5. Angelo has 6 fruits.

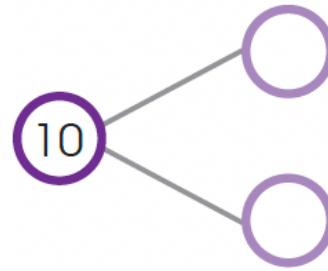


He has _____ strawberries.

He has _____ mangoes.



6. Imee has 10 candies.




She has _____ lollipops.


She has _____ gummy bears.

B. Match to make 8.


1.



2.



3.



4.

