

Name: _____


Date Started: _____ Date Completed: _____ Score: _____

Learning Activity Sheet


Comparing Things: Length

A. Circle the correct answer.

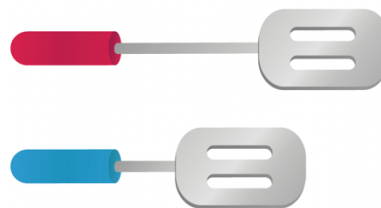
1. Who is taller?



2. Which is shorter?



3. Which is longer?



REX EDUCATION


Rex Knowledge Center, 109 Sen M Cuenco Sr, Quezon City, 1114 Metro Manila, Philippines
(02) 8857 - 7777 | www.rex.com.ph




PARA SA BATA
PARA SA MAMAMAYAN
PARA SA BAYAN

B. Draw.

1. a shorter fish



2. a taller animal



3. the highest apple



C. Fill in the blanks with taller, shorter, longer or higher.


1.



The house is _____ than the building.

The building is _____ than the house.

2.



The pen is _____ than the pencil.

3.



The airplane is _____ than the eagle.