

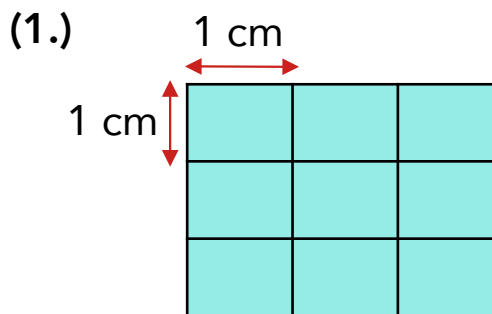
Name: _____

Date Started: _____ Date Completed: _____ Score: _____

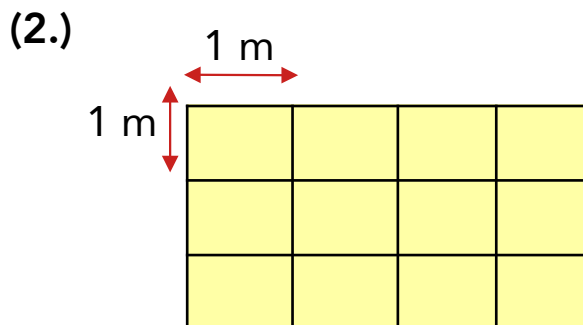
Learning Activity Sheet

Area in cm^2 and m^2

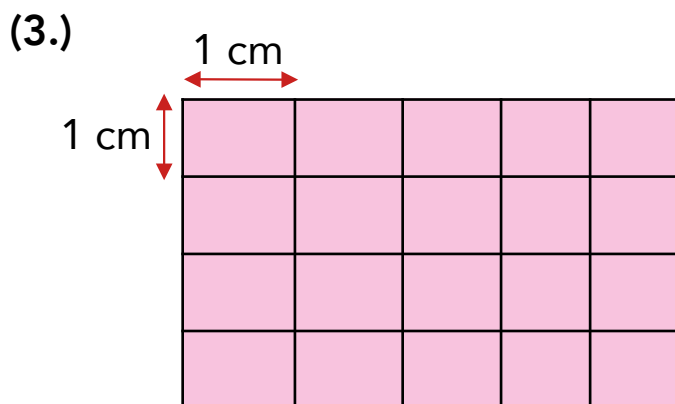
A. Look at each of the following shapes and fill in the blanks.



Area = _____

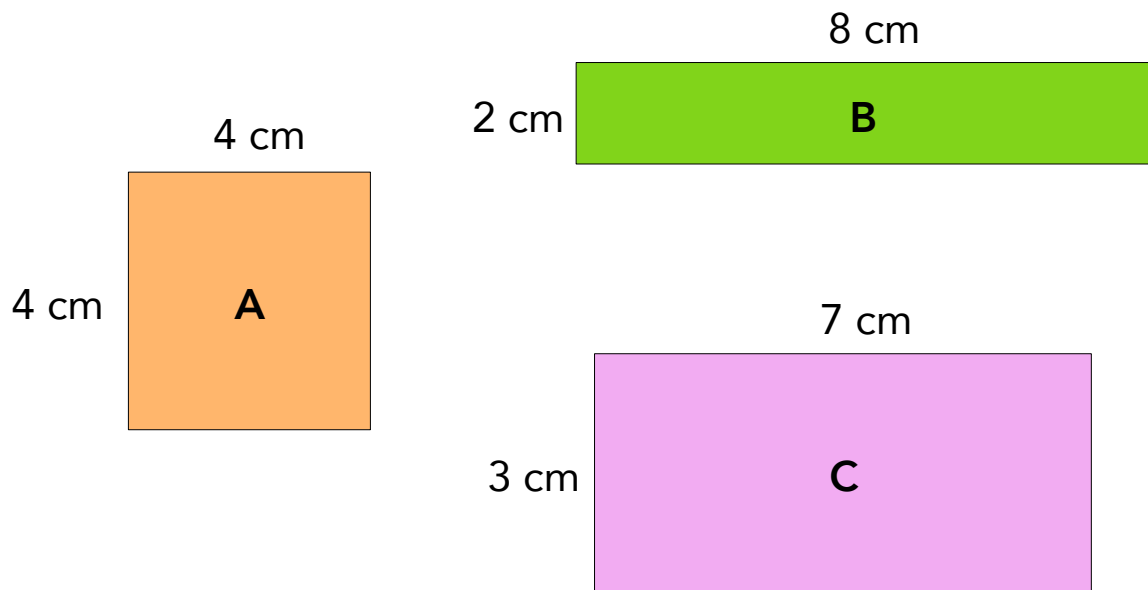


Area = _____



Area = _____

B. Answer each of the following questions.



(1.) What are the areas of each figure?

Area of A: _____ x _____ = _____ cm^2

Area of B: _____ x _____ = _____ cm^2

Area of C: _____ x _____ = _____ cm^2

(2.) Which figure has the greatest area? Figure _____

(3.) Which two figures have the same area?

Figures _____ and _____

(4.) What is the total area of the three figures?

Total area = _____ + _____ + _____

= _____ cm^2