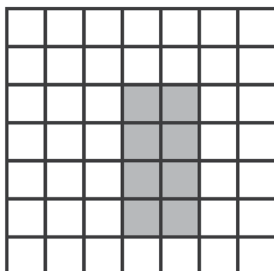


Name: _____
 Date Started: _____ Date Completed: _____ Score: _____

**Learning Activity Sheet
 Perimeter and the Concept of Area**


Given the figure below, identify the length, width, total number of shaded squares, perimeter, and area. The first item is done for you.

1.




Length: 4 units
Width: 2 units
Number of shaded squares: 8
Perimeter: 12 units
Area: 8 square units

2.




a. Length:
 b. Width:
 c. Number of shaded squares:
 d. Perimeter:
 e. Area:

3.



a. Length:
 b. Width:
 c. Number of shaded squares:
 d. Perimeter:
 e. Area:

4.



a. Length:
 b. Width:
 c. Number of shaded squares:
 d. Perimeter:
 e. Area: