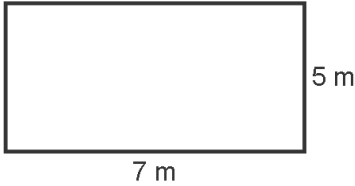
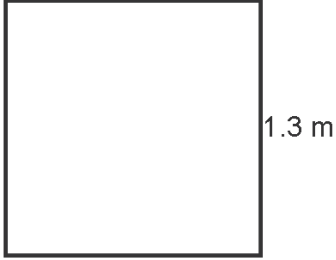
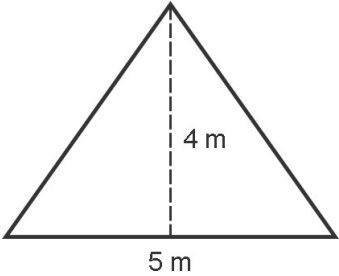


Name: _____

Date Started: _____ Date Finished: _____ Score: _____

**Learning Activity Sheet
Formulas for Area**

Direction: Complete the table below.

FIGURE	DIMENSIONS AND FORMULA FOR AREA	AREA
<p>1.</p> 	<p>Dimensions:</p> <p>length = _____</p> <p>width = _____</p> <p>A = _____</p>	<p>Solution:</p> <p>A = _____</p>
<p>2.</p> 	<p>Dimensions:</p> <p>side = _____</p> <p>A = _____</p>	<p>Solution:</p> <p>A = _____</p>
<p>3.</p> 	<p>Dimensions:</p> <p>base = _____</p> <p>height = _____</p> <p>A = _____</p>	<p>Solution:</p> <p>A = _____</p>