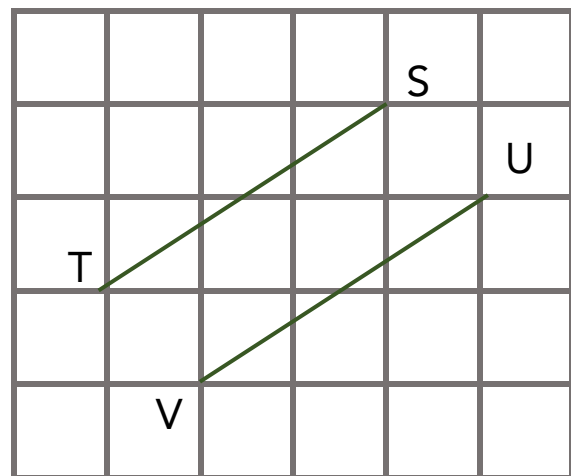
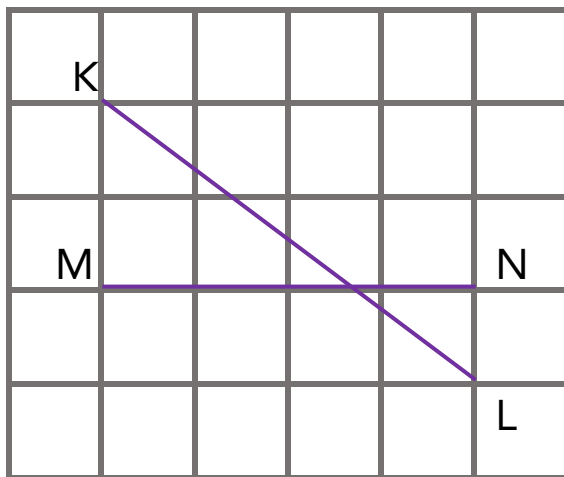


Name: \_\_\_\_\_


Date Started: \_\_\_\_\_ Date Completed: \_\_\_\_\_ Score: \_\_\_\_\_

## Learning Activity Sheet Intersecting Lines

**A. Circle the pair of intersecting lines.**



- B.** Draw a pair of intersecting lines on the square grid below.  
Label one line AB and the other line CD.



- C.** Which of the following letters form intersecting lines?  
Circle them.

A

O

B

X

C

D

D. Mark out the intersecting lines in the following figures.

