

Name: _____

Date Started: _____ Date Completed: _____ Score: _____

Learning Activity Sheet
Counting to 10000

A. Count and complete each place-value chart. Write each number in words.

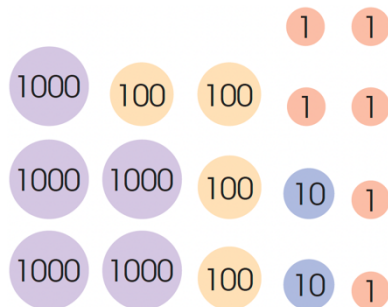
1.



Thousands	Hundreds	Tens	Ones

The number is _____

2.



Thousands	Hundreds	Tens	Ones

The number is _____

B. What is the value of each digit in each of the following numbers?

1. 3 4 5 9











2.

8 0 7 3



C. Use the key to read the symbols. Fill in the place-value chart with the correct numbers. Write each number in words.

Key:  represents 1000  represents 100
 represents 10  represents 1

	Thousands	Hundreds	Tens	Ones
   				

The number is _____

