

Name: _____

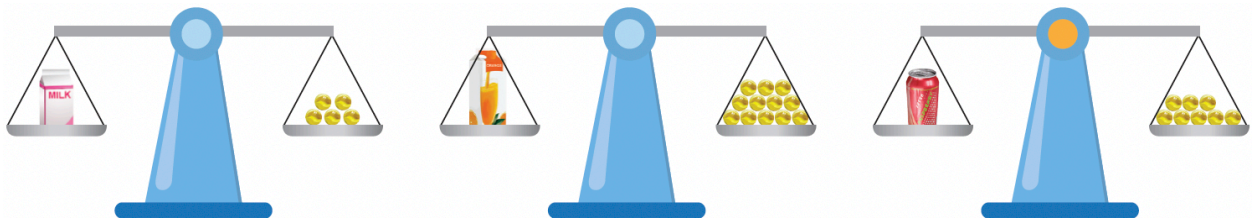
Date Started: _____ Date Completed: _____ Score: _____

Learning Activity Sheet

Finding the Masses of Things

A. Fill in the blanks.

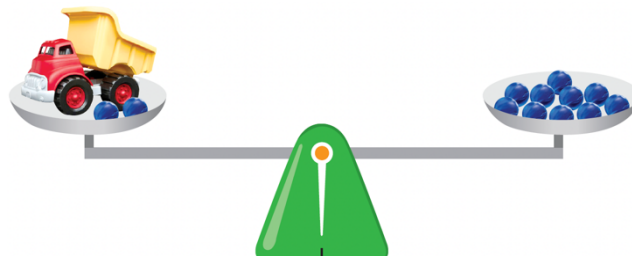
1  stands for 1 unit.



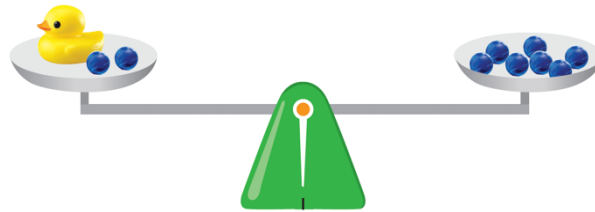
1. The mass of the packet of milk is about _____ units.
2. The mass of the carton of orange juice is about _____ units.
3. The mass of the canned drink is about _____ units.

B. Look at the pictures carefully. Then fill in the blanks.

1  stands for 1 unit.



The mass of the toy truck is about _____ units.



The mass of the duck is about _____ units.