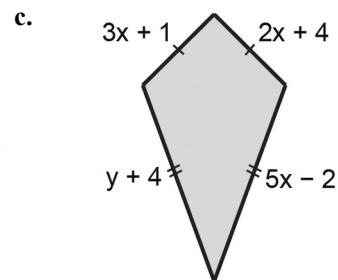
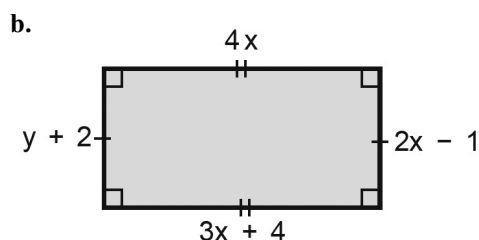
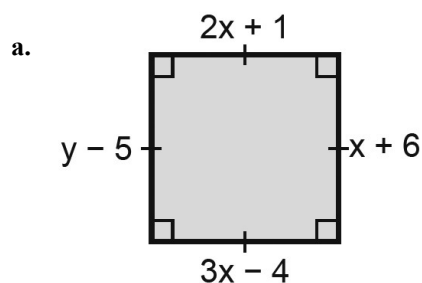


Name: _____
 Date Started: _____ Date Completed: _____ Score: _____

Learning Activity Sheet
Solving Problems Involving the Sides and Angles of a Polygon

Determine the values of x and y in each of the following figures. Write your answers on the space provided below



SOLUTIONS: