

Name: _____
 Date Started: _____ Date Completed: _____ Score: _____


Learning Activity Sheet
Construction – Angle Bisector

Use the given angles to construct the required angles.




1. Construct an angle


a. Congruent to $\angle 1$




b. Congruent to $\angle 2$



c. Congruent to $\angle 3$



2. Construct an angle that measures twice the measure of $\angle 2$.



3. Construct an angle that measures thrice the measure of $\angle 1$.

